





Monday

- 30 more than 53 =
- 6, 9, , 15, , 21
- 250c = €
- $4 \times 10 =$
- $\frac{1}{4}$  of 20 =
- |                      |   |   |
|----------------------|---|---|
| h                    | t | u |
| 4                    | 5 | 2 |
| + 138                |   |   |
| <input type="text"/> |   |   |
- How many days are in November?
- How many minutes between **3:15** and **4:00**?
- $24 \div 4 =$   
- Which direction, clockwise or anticlockwise?  
- How many faces has a cube?  
- |                      |
|----------------------|
| 467                  |
| - 273                |
| <input type="text"/> |
- There were 34 children, 52 men and 35 women at a football match. How many people were at the match altogether?
- Pat had 328 marbles. Dermot had 147 marbles. How many more than Dermot did Pat have?
- There are 6 bags of apples with 2 apples in each and 4 bags with 4 apples in each. How many apples are there altogether?
- Robert was given 24 apples and told to arrange them in bags of 4. How many bags did he fill?

Tuesday

- 65 add 200 =
- |                      |   |
|----------------------|---|
| t                    | u |
| 9                    | 2 |
| - 29                 |   |
| <input type="text"/> |   |
- $1\frac{1}{2}$  hours =  minutes 
- $5 \times 10 =$
- What fraction is shaded?
- Write three hundred and sixty-two as a numeral.
- $\frac{1}{2}$  of 60 =
- $6 + 6 + 6 + 6 + 6 + 6 =$
- How many faces has a cuboid?
- Write the time 10 minutes later than **4:30**.  :
- Arrange these fractions in order of size, starting with the largest:  $\frac{3}{8}$ ,  $\frac{5}{8}$ ,  $\frac{7}{8}$ , , ,
- 5kg 500g - 1kg 250g =

JUNE						
Mon	Tue	Wed	Thu	Fri	Sat	Sun
1	2	3	4	5	6	7
8	9	10	11	12	13	14
15	16	17	18	19	20	21
22	23	24	25	26	27	28
29	30					

- On the 18th of June, Emma had to wait 6 days for her birthday. What date is her birthday?
- On the 24th of June, it will be 12 days since Caoimhe's birthday. What date was her birthday?
- A family returned from a two-week holiday on the 28th of June. On what date did the holiday begin?
- A ship left port on the 4th of June. 16 days later, it returned to port. On what date did the ship return?

## Wednesday

1. The sum of 25 and 10 =

2.  $6 \times 10 =$

3.  $1\frac{1}{4}$  hours =  minutes

4. 
$$\begin{array}{r} 56 \\ 23 \\ + 7 \\ \hline \end{array}$$

5.  + 34 = 60

6. If you were standing up, would you be horizontal or vertical?

7. Arrange these fractions in order of size, starting with the smallest:

$\frac{3}{4}$ ,  $\frac{1}{2}$ ,  $\frac{1}{4}$ , , ,

8.  $42 - 6 - 6 - 6 - 6 =$

9.  $240\text{ml} + 240\text{ml} + 100\text{ml} =$

10. How many faces has a cylinder?



11.  $2 \times 4 \rightarrow 4 \times$   =

12. 
$$\begin{array}{r} \text{m cm} \\ 7 \ 35 \\ - 2 \ 47 \\ \hline \end{array}$$

13. The postman delivered 256 letters on Monday and 49 fewer than that on Tuesday. How many letters did he deliver on Tuesday?

14. Grace ate  $\frac{1}{2}$  a punnet of blueberries. If she ate 15 blueberries, how many blueberries were there in the box at first?

15. A clock showed the time **7:20**. The clock was 25 minutes slow. What was the correct time?

16. If  $\frac{1}{2}$  l of orange juice costs 60c, how much for  $1\frac{1}{2}$  l?

## Thursday

1. 75 plus 200 =

2.  $8 \times 10 =$

3. 783 =  h  t  u

4. 42, 36, , 24,

5.  $100 - 60 =$

6. 550cm =  m  cm

7. Write the time 10 minutes later.  :



8. How many edges has a cuboid?

9. Colour  $\frac{6}{10}$ .

10. 
$$\begin{array}{r} \text{€}5.46 \\ - \text{€}2.57 \\ \hline \end{array}$$

11.  $14 + 2 =$

12.  $4 \times 7 \rightarrow 7 \times$

€339

Computer A

€46 less

Computer B

€?

Computer C





13. How much does it cost to buy both Computer A and B?

14. The total cost of the computers is €950. How much does Computer C cost?




15. How much is the difference between Computers B and C?

16. How much is the difference between the cheapest and dearest computer?

## Monday

- $$\begin{array}{r} h\ t\ u \\ 4\ 5\ 6 \\ +\ 2\ 7\ 4 \\ \hline \end{array}$$
- Round 456 to the nearest 100.
- $3 \times 5 =$
- 80 minutes =  hour(s)  
 minutes
- $625c = \text{€}$
- 
 $12 \div 2 =$
- Will a cube stack?
- Colour 0-4 of this shape. 
- A bottle holds 200ml. How many bottles can be filled from 1 litre of water?
- Measure this line.   

- How many hours in 2 days?
- $$\begin{array}{r} \text{€}6\ 90 \\ -\ \text{€}4\ 55 \\ \hline \end{array}$$
- 
 How much change would I get from €1 if I bought 4 lollipops?
- There are 7 children on a team. How many children on 4 teams?
- A bus leaves at **3:10**. It is now  $\frac{1}{4}$  to 3. How many minutes before the bus leaves?
- A shop sold 235 books one week. It sold 68 less than that the next week. How many books altogether were sold over the two weeks?

## Tuesday

- $$\begin{array}{r} h\ t\ u \\ 5\ 3\ 5 \\ -\ 2\ 7\ 0 \\ \hline \end{array}$$
- $789 =$   h  t  u
- $\frac{1}{2}$  of 16 =
- What is the time?  :  
- $5 \times 5 =$
- Which holds more water, 1 litre jug or 100ml jug?
- 5, 10, , 20, , 30
- Divide these socks into two.  $14 \div 2 =$    

- $9 + 9 + 9 =$
- 
 Colour 0-6 of this shape.
- Arrange these numbers in order of size, starting with the smallest: 782, 287, 872. , ,
- $$\begin{array}{r} \text{€}5\ 45 \\ +\ \text{€}2\ 90 \\ \hline \end{array}$$
- A snail can crawl 6cm in a day.  
 A slug can crawl 9cm in a day.
- How far can a snail crawl in 4 days?
- How far can a slug crawl in 3 days?
- How far altogether can the slug and snail crawl in 3 days?
- How far altogether can the slug and snail crawl in 6 days?

1. List the next three even numbers:

42, 44, , , .

2. h t u

6 7 8

+ 1 5 9

3.  $4 \times 5 =$




4. Name this 3-D shape.

5. How much?



6. What is the time?  :



7.  Colour 0.8 of this shape.

8.  $4 \times 3 \rightarrow$    $\times 4 =$

9. 44cm add 50cm =

10. €7.25

- €3.40

11.  $9 + 9 + 9 + 9 =$



12.  $4 \times 11 =$

13. Rónan can swim 80m in 1 minute.

How far can he swim in 10 minutes?

14. Sharon spent €5.50 on burgers and €3.20 on chips. How much did she spend altogether?

15. How much change did she get out of €10?

16. A sheep farmer had a flock of 325 sheep. He sold 145 on Monday and 98 on Tuesday. How many had he left?

1. Write two hundred and twenty-two as a numeral.

2. What number is 10 less than 65?

3. h t u


6 3 4

- 5 1 9

4.  $6 \times 5 =$

5. Draw a line of symmetry.



6.  What time will it be in 10 minutes?

:

7.  $30 + 10 =$

8. 9, 18, , 36, , 54

9.  $9 + 9 + 9 + 9 + 9 =$

10. 26cm + 72cm =

11. €5.60

+ €3.45

12.  $2 \times$   = 18

13. How many more squares make up an arm than a leg?



14. How many fewer squares make up the head than the body?

15. How many more squares make up the body than the 2 arms and 2 legs?

16. How many squares make up the head and body?

## DAY 41

- Circle the word that has a **ch** sound at the end.  
chat                      match                      chair
- Circle and rewrite the misspelt word.  
*Do you know were the canteen is?*
- Circle the word that is spelt correctly.  
copeed                      copyed                      copied
- Add two letters to make the opposite of this word. **correct**
- Write the plural form of **elf**.
- Circle the word closest in meaning to **evening**.  
night                      morning                      day
- Circle the opposite of **dull**.  
hard                      flat                      bright
- Circle the rhyming word. **wait**  
cut                      straight                      puppet
- Punctuate.  
*We didnt make it to the bank in time*
- Add capital letters.  
*my favourite day is christmas day.*
- Circle the correct word. **it them**  
*Lisa likes \_\_\_ when James tells funny jokes.*
- Circle the verb.  
*I scored four goals in the match.*
- Circle the past tense form of **cry**.  
cryed                      cried                      cries
- it's** or **its**? When  cold, I wear my gloves.
- Circle the words that make the shortened word **that's**.                      that is                      what is

## DAY 42

- Circle the word with NO long **a** (age) sound.  
cage                      great                      card
- Circle and rewrite the misspelt word.  
*The childrn played in the garden.*
- Which word is the opposite of **loud**?  
quite                      quiet
- Add **y** to make a new word.  
rain                      warm
- Write the singular form of **leaves**.
- Circle the word closest in meaning to **disappear**.  
found                      vanish                      control
- Circle the opposite of **odd**.  
even                      strange                      number
- Circle the rhyming word. **they**  
then                      those                      stay
- Punctuate.  
*I cant come to training today*
- Add capital letters.  
*i made a card for valentine's day.*
- Circle the correct word. **it them**  
*The tree had no leaves on \_\_\_ in autumn.*
- Circle the proper noun.  
*I spoke to Mike on the phone.*
- Circle a present tense form of **saf**.  
sitted                      sitter                      sit
- it's** or **its**? My bike lost  chain yesterday.
- Circle the words that make the shortened word **what's**.                      it is                      what is

## DAY 47

- Circle the word with NO long **a** (age) sound.  
*today great flat*
- Which letters make the long **a** (age) sound?  
*stain*
- Which word is spelt correctly?  
*Austrlia Austrylea Australia*
- Add two letters to make this word mean the opposite. **sure**
- Change the ending to make this word mean the most full. **fuller**
- four** or **for**? Are you ready   
*school?*
- Which word does NOT have a similar meaning to **drink**?  
*pour gulp sip*
- Which word is NOT the opposite of **open**?  
*touch close shut*
- How many syllables are in **delicious**?
- Add capital letters.  
*saint patrick's day is in march.*
- a** or **an**?  egg
- Circle the tense this sentence is written in.  
**past present future**  
*Tomorrow, our class will go to the zoo.*
- Circle the tense this sentence is written in.  
**past present future**  
*The yellow team won the school trophy.*
- Circle the correct word. *you'll you'll*
- Which letters are left out from **you'll**?  
*wi ho no*

## DAY 48

- Write the silent letter in this word.  
*gnome*
- Write the jumbled word correctly.  
*Kim saw a somufa TV star in the city.*
- How many syllables in this word? **camping**
- Make a new word. **sub un**  
 load
- Circle the plural of kiss. *kisses kiss*
- Circle two words that can be built from **camp**.  
*camped camply camping campless*
- Circle the correct spelling of **move + ing**.  
*moving moveing*
- Circle the rhyming words.  
*skipped slapped slipped*
- Add the missing punctuation mark. (.)  
*Dan and Jills dog is black and white.*
- Add four capital letters.  
*i live on the corner of green and brown street.*
- Put one word into the blank space.  
*Jim and Fred are friends;  play football together.*
- Circle the proper noun.  
*Laura likes swimming.*
- Circle two proper nouns.  
*I would like to visit India and China.*
- is** or **are**?  
*Where  the dog's bowl?*
- I** or **me**? Are you coming with ?

Week 19

Multiplication  
 $\times 7$ 

Weekly Assessment



Thursday

Time allowed:  minutes

1.  $0 \times 7 =$

2.  $4 \times 7 =$

3.  $2 \times 7 =$

4.  $3 \times 7 =$

5.  $7 \times 7 =$

6.  $5 \times 7 =$

7.  $1 \times 7 =$

8.  $10 \times 7 =$

9.  $6 \times 7 =$

10.  $8 \times 7 =$

11.  $9 \times 7 =$

12.  $2 \times 7 =$

13.  $4 \times 7 =$

14.  $3 \times 7 =$

15.  $6 \times 7 =$

16.  $0 \times 7 =$

17.  $5 \times 7 =$

18.  $7 \times 7 =$

19.  $10 \times 7 =$

20.  $8 \times 7 =$

Score

20

Wednesday

Time allowed:  minutes

1.  $8 \times 7 =$

2.  $3 \times 7 =$

3.  $10 \times 7 =$

4.  $6 \times 7 =$

5.  $2 \times 7 =$

6.  $9 \times 7 =$

7.  $0 \times 7 =$

8.  $5 \times 7 =$

9.  $7 \times 7 =$

10.  $4 \times 7 =$

11.  $2 \times 7 =$

12.  $1 \times 7 =$

13.  $7 \times 7 =$

14.  $9 \times 7 =$

15.  $5 \times 7 =$

16.  $6 \times 7 =$

17.  $4 \times 7 =$

18.  $10 \times 7 =$

19.  $8 \times 7 =$

20.  $3 \times 7 =$

Score

20

Tuesday

Time allowed:  minutes

1.  $10 \times 7 =$

2.  $0 \times 7 =$

3.  $9 \times 7 =$

4.  $7 \times 7 =$

5.  $1 \times 7 =$

6.  $4 \times 7 =$

7.  $8 \times 7 =$

8.  $6 \times 7 =$

9.  $2 \times 7 =$

10.  $5 \times 7 =$

11.  $3 \times 7 =$

12.  $8 \times 7 =$

13.  $4 \times 7 =$

14.  $6 \times 7 =$

15.  $3 \times 7 =$

16.  $7 \times 7 =$

17.  $10 \times 7 =$

18.  $2 \times 7 =$

19.  $5 \times 7 =$

20.  $9 \times 7 =$

Score

20

Monday

Time allowed:  minutes

1.  $1 \times 7 =$

2.  $2 \times 7 =$

3.  $3 \times 7 =$

4.  $4 \times 7 =$

5.  $5 \times 7 =$

6.  $6 \times 7 =$

7.  $7 \times 7 =$

8.  $8 \times 7 =$

9.  $9 \times 7 =$

10.  $10 \times 7 =$

11.  $4 \times 7 =$

12.  $6 \times 7 =$

13.  $0 \times 7 =$

14.  $7 \times 7 =$

15.  $5 \times 7 =$

16.  $8 \times 7 =$

17.  $2 \times 7 =$

18.  $9 \times 7 =$

19.  $3 \times 7 =$

20.  $10 \times 7 =$

Score

20



## Look Back

Week 20

Monday

Time allowed:  minutes

1.	$9 \times 2 =$	<input type="text"/>
2.	$10 \times 4 =$	<input type="text"/>
3.	$5 \times 8 =$	<input type="text"/>
4.	$10 \times 2 =$	<input type="text"/>
5.	$5 \times 4 =$	<input type="text"/>
6.	$10 \times 8 =$	<input type="text"/>
7.	$8 \times 2 =$	<input type="text"/>
8.	$9 \times 4 =$	<input type="text"/>
9.	$3 \times 8 =$	<input type="text"/>
10.	$7 \times 2 =$	<input type="text"/>
11.	$6 \times 8 =$	<input type="text"/>
12.	$8 \times 4 =$	<input type="text"/>
13.	$7 \times 8 =$	<input type="text"/>
14.	$6 \times 4 =$	<input type="text"/>
15.	$5 \times 2 =$	<input type="text"/>
16.	$8 \times 8 =$	<input type="text"/>
17.	$7 \times 4 =$	<input type="text"/>
18.	$9 \times 8 =$	<input type="text"/>
19.	$4 \times 8 =$	<input type="text"/>
20.	$6 \times 8 =$	<input type="text"/>

Score

20

Tuesday

Time allowed:  minutes

1.	$9 \times 5 =$	<input type="text"/>
2.	$0 \times 5 =$	<input type="text"/>
3.	$10 \times 10 =$	<input type="text"/>
4.	$5 \times 5 =$	<input type="text"/>
5.	$4 \times 10 =$	<input type="text"/>
6.	$10 \times 5 =$	<input type="text"/>
7.	$1 \times 5 =$	<input type="text"/>
8.	$4 \times 5 =$	<input type="text"/>
9.	$6 \times 5 =$	<input type="text"/>
10.	$0 \times 10 =$	<input type="text"/>
11.	$6 \times 10 =$	<input type="text"/>
12.	$9 \times 10 =$	<input type="text"/>
13.	$1 \times 10 =$	<input type="text"/>
14.	$3 \times 5 =$	<input type="text"/>
15.	$8 \times 5 =$	<input type="text"/>
16.	$7 \times 10 =$	<input type="text"/>
17.	$2 \times 5 =$	<input type="text"/>
18.	$3 \times 10 =$	<input type="text"/>
19.	$7 \times 5 =$	<input type="text"/>
20.	$8 \times 10 =$	<input type="text"/>

Score

20

Wednesday

Time allowed:  minutes

1.	$3 \times 3 =$	<input type="text"/>
2.	$5 \times 3 =$	<input type="text"/>
3.	$6 \times 6 =$	<input type="text"/>
4.	$8 \times 9 =$	<input type="text"/>
5.	$9 \times 3 =$	<input type="text"/>
6.	$4 \times 3 =$	<input type="text"/>
7.	$5 \times 6 =$	<input type="text"/>
8.	$7 \times 9 =$	<input type="text"/>
9.	$8 \times 3 =$	<input type="text"/>
10.	$7 \times 6 =$	<input type="text"/>
11.	$4 \times 9 =$	<input type="text"/>
12.	$2 \times 3 =$	<input type="text"/>
13.	$6 \times 3 =$	<input type="text"/>
14.	$9 \times 9 =$	<input type="text"/>
15.	$8 \times 6 =$	<input type="text"/>
16.	$0 \times 3 =$	<input type="text"/>
17.	$5 \times 9 =$	<input type="text"/>
18.	$7 \times 3 =$	<input type="text"/>
19.	$6 \times 9 =$	<input type="text"/>
20.	$3 \times 9 =$	<input type="text"/>

Score

20

Thursday

Time allowed:  minutes

1.	$6 \times 7 =$	<input type="text"/>
2.	$8 \times 7 =$	<input type="text"/>
3.	$5 \times 7 =$	<input type="text"/>
4.	$2 \times 7 =$	<input type="text"/>
5.	$9 \times 7 =$	<input type="text"/>
6.	$0 \times 7 =$	<input type="text"/>
7.	$3 \times 7 =$	<input type="text"/>
8.	$10 \times 7 =$	<input type="text"/>
9.	$7 \times 7 =$	<input type="text"/>
10.	$4 \times 7 =$	<input type="text"/>
11.	$7 \times 5 =$	<input type="text"/>
12.	$7 \times 1 =$	<input type="text"/>
13.	$7 \times 6 =$	<input type="text"/>
14.	$7 \times 4 =$	<input type="text"/>
15.	$7 \times 2 =$	<input type="text"/>
16.	$7 \times 9 =$	<input type="text"/>
17.	$7 \times 6 =$	<input type="text"/>
18.	$7 \times 8 =$	<input type="text"/>
19.	$7 \times 3 =$	<input type="text"/>
20.	$7 \times 7 =$	<input type="text"/>

Score

20



## DAY 43

- Circle the word that has a **p** sound at the end.  
puppy      drop      popped
- Write the jumbled word correctly.  
I like to twach my sister play basketball.
- Circle the word that is spelt correctly.  
strait      straight      strate
- Add two letters to make the opposite of this word. **ripe**
- Write the plural form of **box**.
- Circle the word closest in meaning to **modern**.  
new      ancient      visible
- Circle the opposite of **fake**.  
story      real      pretend
- Circle the rhyming words.  
tray      weigh      gate
- Add punctuation to the end of the sentence.  
Next week is the start of the football season
- Add four capital letters.  
simon and anna went to south africa.
- Circle the proper noun. *I like Fridays best.*
- Circle the adjective. *The tree is enormous!*
- Write the past tense form of **wait**.
- is** or **are**? He  my brother  
Josh's friend.
- Shorten **we have**.

## DAY 44

- Circle the word with NO **u** (book) sound.  
rude      bully      run
- Circle and rewrite the misspelt word.  
*Try not to brak your new toy.*
- Which word means **a large animal**?  
bare      bear
- Add **ness** to make a new word.  
sad      friend
- Write the singular form of **foxes**.
- Circle the word closest in meaning to **wealth**.  
information      surprise      riches
- Circle the opposite of **true**.  
false      real      fact
- Circle the rhyming words.  
should      shall      stood
- Add punctuation to the end of the sentence.  
*Where did you go today*
- Add three capital letters.  
*next week i'll see my friend peter.*
- Circle the adjective. *Jan's house is huge!*
- Circle the verb.  
*Anna shut the small window.*
- Write a present tense form of **shouted**.
- has** or **have**?  
Jamie  two sisters.
- Circle the letter that is left out from the shortened word **isn't**.  
a      o      i

## DAY 45

- Rewrite the misspelt word correctly.  
We woke up *erly* today.
- Which letters are missing?   
The grand final ma\_\_ \_\_ is on TV tonight.
- Which letter makes the **u** (book) sound?  
helpful
- Circle the correct word.  
I need to get out of the son/sun; it's too hot!
- Circle the last word in alphabetical order.  
chain cheese chips cheek
- Circle the missing word. **there their they're**  
Can they bring \_\_ chairs?
- Circle the plural form of **person**.  
persones people
- Circle the word you can add to **some**.  
body person
- Add the missing punctuation mark. (')  
I havent seen her new schoolbag.
- Add three capital letters.  
bunratty castle is a famous landmark in clare.
- Write the missing noun. **books paper**  
Karen is always reading .
- Write the missing verb. **play plays**  
Jed  the guitar and the drums.
- Circle the two adjectives.  
I wore a green shirt and blue shoes.
- your** or **you're**?  
May I borrow  pen?
- was** or **were**? Jay's friends   
playing in the park.

MY SCORE

## DAY 46

- Write the silent letter in this word.  
sign
- Write the jumbled word correctly.  
I wish I could see into the future.
- How many syllables are in this word? **suddenly**
- Make this word mean the opposite.  
**mis dis**  behave
- Circle the plural of **dollar**. dollars dollares
- Circle three words that can be built from **open**.  
opened opening reopen openful
- Circle the correct spelling of **know + ing**.  
knowing knowing
- Circle the rhyming words.  
peach catch teach
- Add the missing punctuation mark. (')  
I wasnt ready in time this morning.
- Rewrite the two words that need capitals.  
Wexford is built on the river slaney.
- Circle the missing noun. **jean's jumper**  
I went shopping and bought a new \_\_.
- Circle the missing word. **reads reading**  
Tim was \_\_ the newspaper.
- Circle the adjective.  
The TV show on yesterday was funny.
- your** or **you're**?  
Where is  ruler?
- he** or **him**?  
I went to the park with .

MY SCORE